













Cherry Blossoms

	+		=	20
	+		=	15
	+		=	12
	+		=	<input type="text"/>
	+		=	11
	+		=	<input type="text"/>












Use your Math skills to find the correct value for each item! (Answers Below)

There are hundreds of varieties of cherry blossom trees, but of the 3,800 in Washington, DC, the Yoshino Cherry tree is the most common.

Cherry Blossoms are a symbol of hope and renewal and friendship between the United States and Japan.

"Sakura" is Japanese for Cherry Blossom

At 555' tall with almost 900 stairs to get to the top, the Washington Monument is a beautiful backdrop for the cherry blossom trees at the National Mall in Washington, DC.

14	=		+	
11	=		+	
17	=		+	
12	=		+	
15	=		+	
20	=		+	